

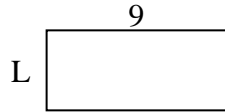


Determine the value of 'L'. Lengths are in cm (not to scale).

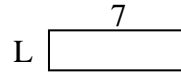
1) perimeter = 12



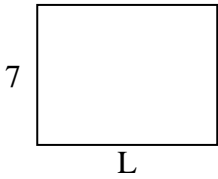
2) perimeter = 26



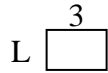
3) perimeter = 18



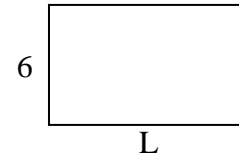
4) perimeter = 32



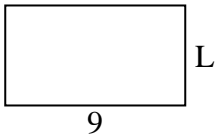
5) perimeter = 10



6) perimeter = 32




7) perimeter = 28



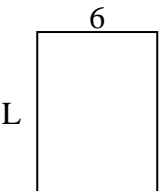
8) perimeter = 24



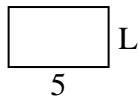
9) perimeter = 30



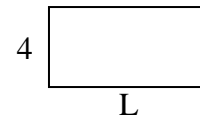
10) perimeter = 28



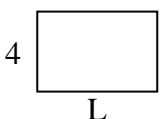
11) perimeter = 16



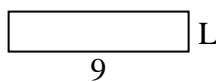
12) perimeter = 24



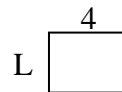
13) perimeter = 20



14) perimeter = 22



15) perimeter = 14



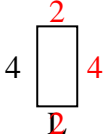
Answers

1. _____
2. _____
3. _____
4. _____
5. _____
6. _____
7. _____
8. _____
9. _____
10. _____
11. _____
12. _____
13. _____
14. _____
15. _____

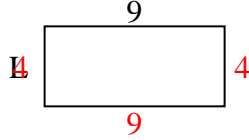


Determine the value of 'L'. Lengths are in cm (not to scale).

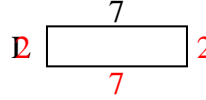
1) perimeter = 12



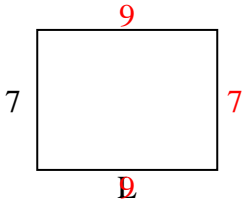
2) perimeter = 26



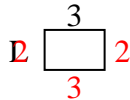
3) perimeter = 18



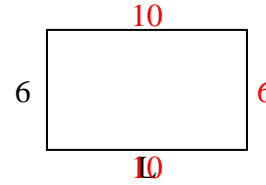
4) perimeter = 32



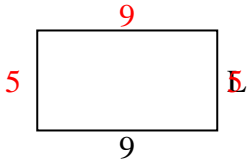
5) perimeter = 10



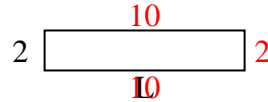
6) perimeter = 32



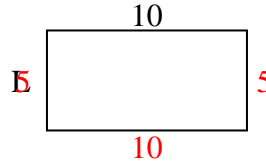
7) perimeter = 28



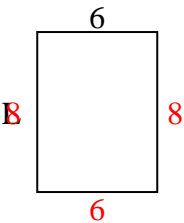
8) perimeter = 24



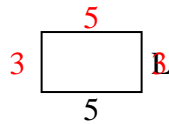
9) perimeter = 30



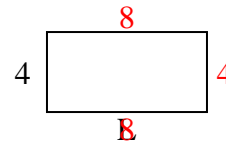
10) perimeter = 28



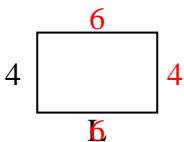
11) perimeter = 16



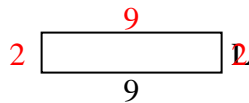
12) perimeter = 24



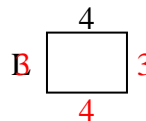
13) perimeter = 20



14) perimeter = 22



15) perimeter = 14



Answers

1. 2 cm

2. 4 cm

3. 2 cm

4. 9 cm

5. 2 cm

6. 10 cm

7. 5 cm

8. 10 cm

9. 5 cm

10. 8 cm

11. 3 cm

12. 8 cm

13. 6 cm

14. 2 cm

15. 3 cm